

Name: _____

Date: _____

1

Select the correct answer.

Subtract 238 from 647.

- A 171
- B 409
- C 476
- D 885

2

Select the correct answer.

_____ + 79 = 290

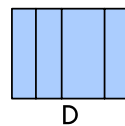
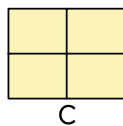
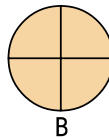
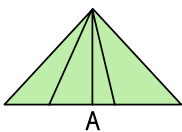
The missing number is _____ .

- A 132
- B 211
- C 369
- D 501

3

Select the correct answer.

Which of the figures are divided equally into four parts?



- A A and B
- B B and D
- C B and C
- D C and D

4

Select the correct answer.

Which of the numbers are even?

5 6 11 20

- A 5 and 6
- B 6 and 20
- C 6 and 11
- D 11 and 20


5

Solve.

Samantha has 4 trays.

Each tray has 8 buns.

How many buns does Samantha have?



$$8 + 8 + 8 + 8 = \square$$

$$4 \times 8 = \square$$

Samantha has \square buns.

6

Select the correct answer.

Ace has 5 coins.

He has 42¢.

There are 2 pennies, 1 quarter and 1 dime.

What is the value of the fifth coin?

- A 1¢
- B 5¢
- C 10¢
- D 25¢

7

Select the correct answer.




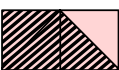
Which of the following groups of fractions is arranged from the least to greatest?

- A $\frac{1}{5}, \frac{1}{8}, \frac{1}{4}$
- B $\frac{1}{8}, \frac{1}{5}, \frac{1}{4}$
- C $\frac{1}{4}, \frac{1}{5}, \frac{1}{8}$
- D $\frac{1}{8}, \frac{1}{4}, \frac{1}{5}$

8

Select the correct answer.

Which figure shows $\frac{1}{3}$ shaded?

- A 
- B 
- C 
- D 

9

Fill in the blanks.



- a. The digit is in the ones place.
- b. The digit is in the tens place.
- c. The digit is in the hundreds place.

10

Fill in the blanks.

$$678 = 600 + \square + 8$$
$$= \square \text{ hundreds} + \square \text{ tens} + 8 \text{ ones}$$

11

Select the correct answer.

$$808 < / > 880$$

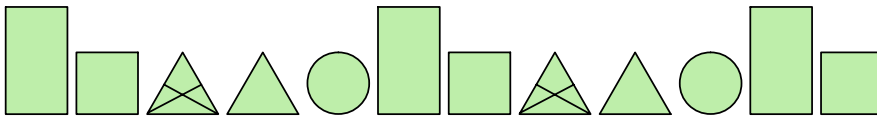
12

Fill in the blanks.

$$\begin{array}{r} +100 +100 \\ \curvearrowright \quad \curvearrowright \\ 327, 427, 527, \square, \square, \square \end{array}$$

13

Select the correct answer.



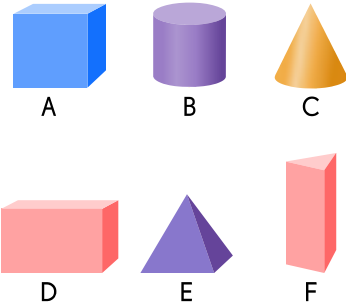
What comes next in the pattern?

- A
- B
- C
- D

14

Look at the objects.
Then fill in the blanks.

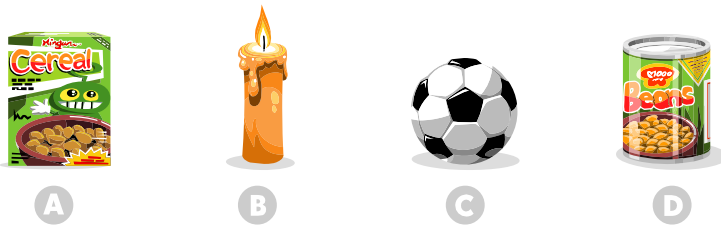
Object	Number of flat surfaces	Number of curved surfaces
A		
B		
C		
D		
E		
F		



15

Select the correct answer.

Which object has no flat surfaces?



16

Select the correct answer.

What is 157 written in words?

- A One hundred fifteen-seven
- B One hundred fifty-seven
- C One fifty-seven

17

Select the correct answer.

Mrs. Henry bought 6 bags of potatoes. Each bag has 10 potatoes.
How many potatoes does he have in all?

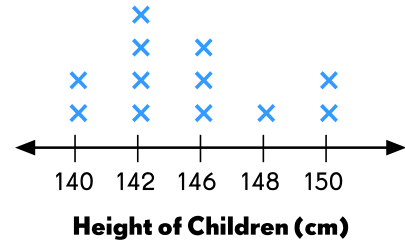
- A 6
- B 10
- C 16
- D 60

18

The table and line plot show the height of some children in a Grade 2 class.

Fill in the blanks.

Height (cm)	140	142	146	148	150
Number of Children	2	4	3	1	2




The same number of children is and centimeters.

19

Select the correct answer.

The picture graph shows the numbers of students in a class who picked each color as their favorite.
How many students picked pink as their favorite color?

- A 7
- B 12
- C 30
- D 35




20

Select the correct answer.

The picture graph shows the numbers of students in a class who picked each color as their favorite. 22 boys picked blue as their favorite color. How many girls picked blue as their favorite color?

- A 6
- B 8
- C 16
- D 30



21

Fill in the blank.

Subtract.

$$714 - 325 = \square$$

22

Fill in the blank.

A bag has 34 red beans and 26 green beans. How many beans are there in all?

There are \square beans in all.

23

Select A.M. or P.M.

Twenty-five minutes after nine in the morning

- A.M. P.M.

24

Fill in the blank.

The sum of two numbers is 535.

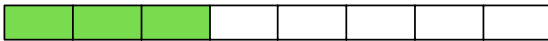
The greater number is 320.

What is the smaller number?

The smaller number is .

25

Fill in the blanks.



What fraction of the bar is not colored?



26

Select the correct answer.

What is the amount of money shown?

- A \$40.21
- B \$35.31
- C \$50.21
- D \$40.30



27

Fill in the blank.

Margaret bakes 36 muffins. She places them equally onto 4 trays.
How many muffins are there on each tray?

There are muffins on each tray.

28

Fill in the blank.

Laura saved \$36 in January. She saved \$45 in February.
How much more did she save in February than in January?

Laura saved \$ more in February than in January.

29

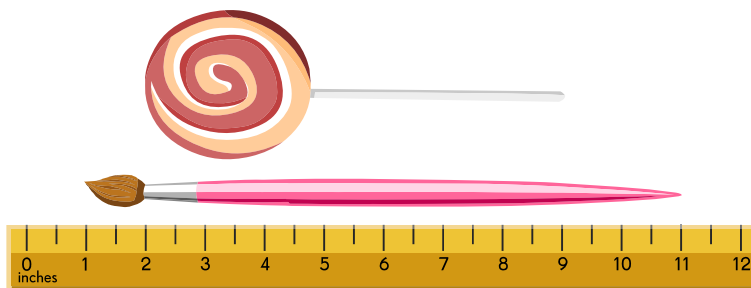
Fill in the blank.

Timothy shares 35 dog biscuits equally among 5 dogs.
How many dog biscuits does each dog get?

Each dog gets dog biscuits.

30

Fill in the blanks.



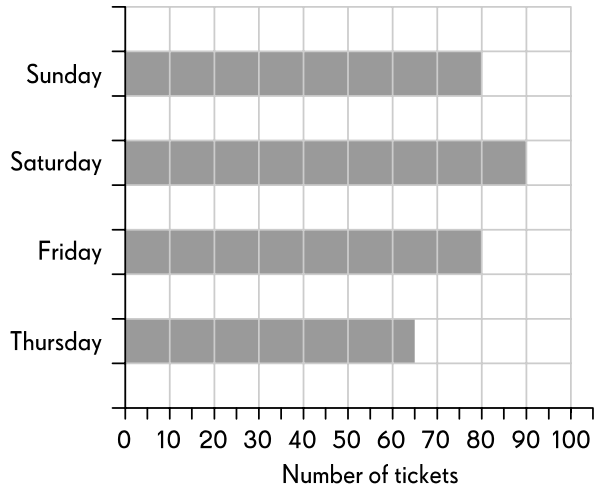
The lollipop is inches long.

The paintbrush is inches longer than the lollipop.

31

Fill in the blank.

The bar graph shows the ticket sales for a show over four days.



There were fewer tickets sold on Thursday than on Saturday.

32

Fill in the blank.

Brian and his 4 friends collected 7 leaves each.
How many leaves did they collect in all?

They collected leaves in all.

33

Fill in the blanks.

The time is min to 8.



34

Fill in the blank.

A green ribbon is 80 cm long.
It is 15 cm longer than a red ribbon.
What is the length of the red ribbon?

The length of the red ribbon is cm long.

35

Look at the pattern.

Select what comes next.



36

Fill in the blank.

Zara has 260 coupons. Julie has 80 more coupons than Zara.
Lenny has 30 fewer coupons than Julie.
How many coupons does Lenny have?

Lenny has coupons.

37

Complete the sentence.

more than

less than

the same as

A footpath is 4 m long.

It is _____ 4 yd long.

38

Fill in the blank.



bag



dress



doll



magazine

Myrna spends exactly \$60 on two of the items.
Which items does she buy?

She buys a _____ and a _____.

39

Fill in the blank.



bag



dress



doll



magazine

Mrs Allen wants to buy all of the above.
How much money does she need?

She needs \$ _____.

40

Fill in the blank.

Ship A has 745 passengers. 136 more passengers board the ship.
How many passengers are there in all?

There are passengers in all.

Grade 2

1. B
2. B
3. C
4. B
5. 32
6. B
7. B
8. A
9. 4, 2, 9
10. 70 ; 6 , 7
11. <
12. 327,427,527,627,727,827
13. D

Object	Number of flat surfaces	Number of curved surfaces
A	6	0
B	2	1
C	1	1
D	6	0
E	5	0
F	5	0

- 14.
15. C
16. B
17. D
18. 140 and 150
19. D
20. B
21. 389
22. 60
23. AM
24. 215
25. $\frac{5}{8}$
26. D
27. 9
28. 9
29. 7
30. 7 and 3
31. 25
32. 35
33. 15
34. 65



- 35.
- 36. 310
- 37. More than
- 38. Dress and Magazine
- 39. 120
- 40. 881